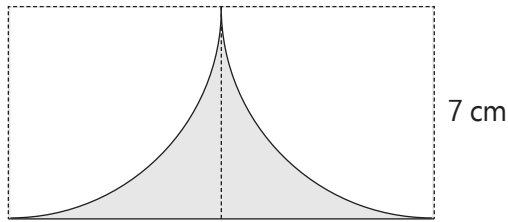


B. Comprehension

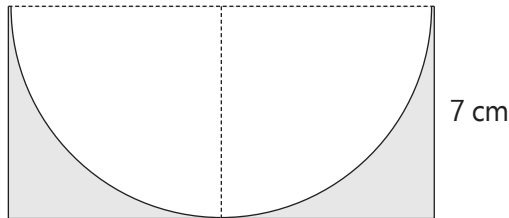
1. Find the perimeter of the shaded parts. (Take $\pi = \frac{22}{7}$)

(a)



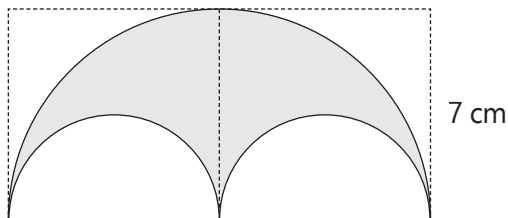
Ans: _____ cm

(b)



Ans: _____ cm

(c)



Ans: _____ cm