
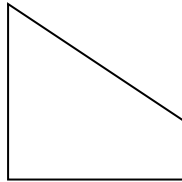


B. Comprehension

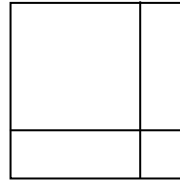
1. Classify the following figures based on symmetry.
Write the letter representing each figure in the table.



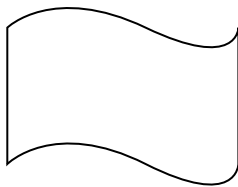
A



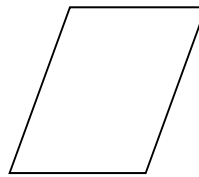
B



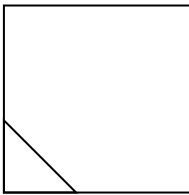
C



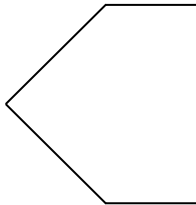
D



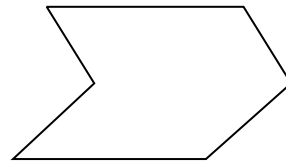
E



F



G



H

Type	Figure
Symmetric	
Not symmetric	