

Name \_\_\_\_\_ Date \_\_\_\_\_

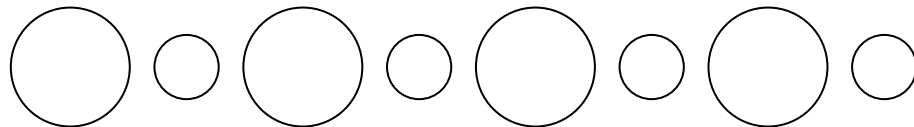
# Unit 14 Shapes

- Identifying, naming and describing 3D shapes
- Identifying the basic 3D shapes that make up a given figure
- Recognising and completing patterns made with basic shapes

## AB KNOWLEDGE

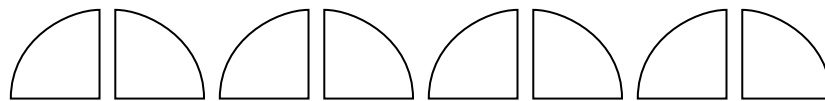
1. Study each pattern. Circle the correct answer(s).

(a) The pattern is based on a change in



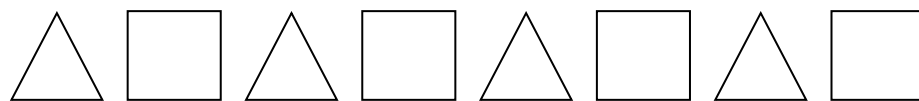
shape	size	orientation	colour
-------	------	-------------	--------

(b) The pattern is based on a change in



shape	size	orientation	colour
-------	------	-------------	--------

(c) The pattern is based on a change in



shape	size	orientation	colour
-------	------	-------------	--------